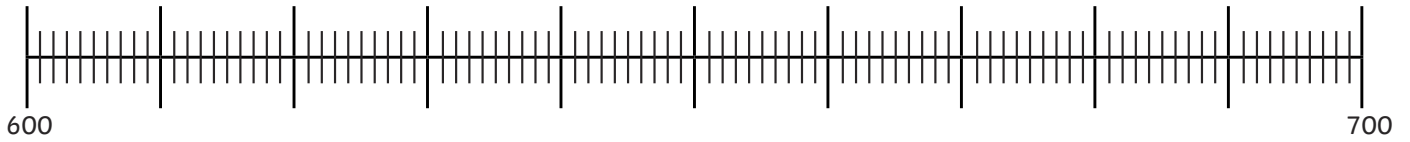




1) Match each dragon egg to its correct position on the number line.

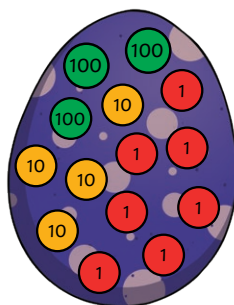


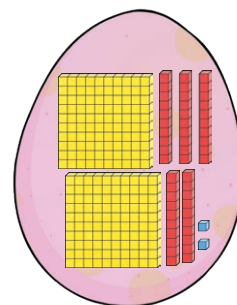
Now round each number to the nearest hundred to sort each egg into the correct nest.



2) Look at the number represented in each dragon egg and round it to the nearest hundred.







1) Read each statement about the dragon and identify whether it is true or false.




**The Winged Warrior**

Mass: 1267 kilograms

Speed: 4957 metres per hour

Fire Temperature: 605°C



Rounded to the nearest hundred, the Winged Warrior's mass is 1260 kilograms.

True or false? \_\_\_\_\_

How do you know? \_\_\_\_\_

\_\_\_\_\_

Rounded to the nearest hundred, the Winged Warrior's speed is 5000 metres per hour.

True or false? \_\_\_\_\_

How do you know? \_\_\_\_\_

\_\_\_\_\_

Rounded to the nearest hundred, the temperature of the Winged Warrior's fire is 500°C.

True or false? \_\_\_\_\_

How do you know? \_\_\_\_\_

\_\_\_\_\_

2) Can you write another true or false statement for your partner to solve?

\_\_\_\_\_

\_\_\_\_\_





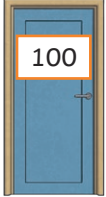
1) a) The wizard, Merlin, is trying to work out approximately how many baby dragons have hatched. He counted the dragons and rounded the number to 800, rounding to the nearest hundred. How many dragons could there be? Give three possible answers.

\_\_\_\_\_

b) Explain how you solved this question.

\_\_\_\_\_  
\_\_\_\_\_  
\_\_\_\_\_

2) Last year, 900 baby dragons hatched. Merlin housed them in three different rooms. The number shown on the door is the number of dragons in the room rounded to the nearest hundred.

		
330	440	130

One possible way of housing the dragons has been shown in the table. Merlin thinks that there could be more than twenty different ways to house different numbers of dragons in these three rooms. Do you agree or disagree? Give examples of different possibilities to support your answer.

\_\_\_\_\_  
\_\_\_\_\_  
\_\_\_\_\_  
\_\_\_\_\_